


SLOPES



NAME _____ BLOCK _____

Find the slope of the line passing through the following points.

1. $(7, -4)$ and $(-3, -6)$

2. $(2, -7)$ and $(2, 15)$

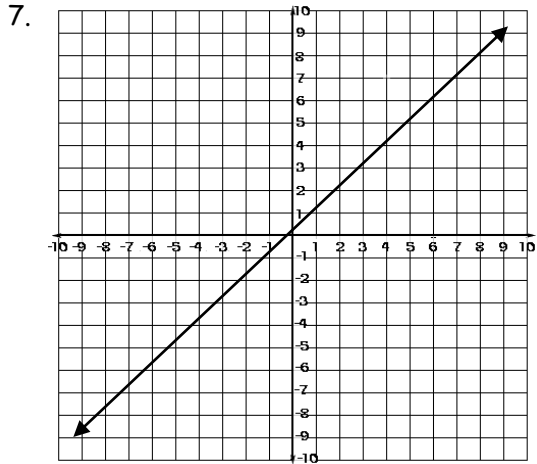
3. $(-5, -2)$ and $(-3, -4)$

4. $(2, -8)$ and $(6, -8)$

5. $(3, -1)$ and $(-2, -7)$

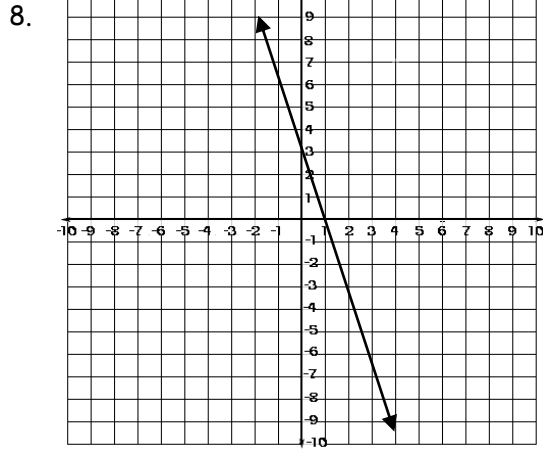
6. $(5, 3)$ and $(-2, -8)$

Find the slope of the following lines.



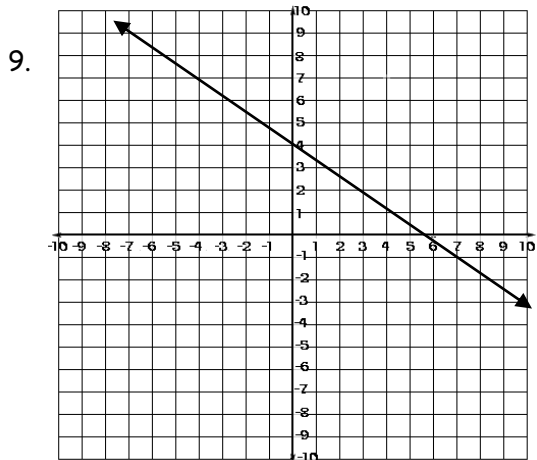
POSITIVE OR NEGATIVE

SLOPE: _____



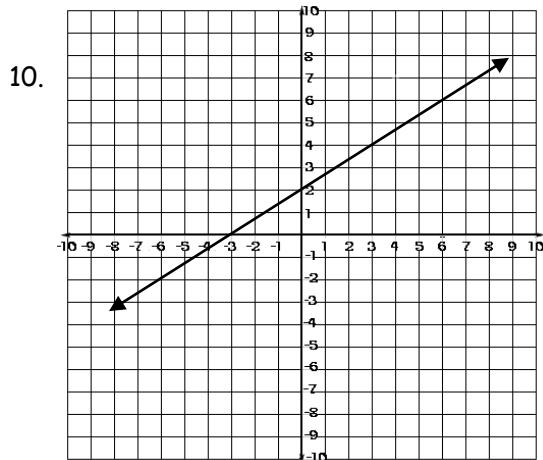
POSITIVE OR NEGATIVE

SLOPE: _____



POSITIVE OR NEGATIVE

SLOPE: _____



POSITIVE OR NEGATIVE

SLOPE: _____