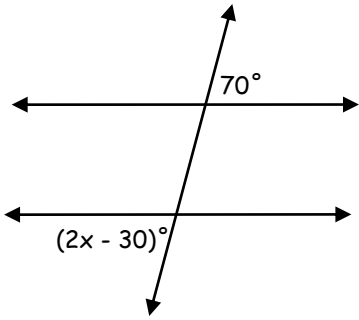


PARALLEL LINES AND TRANSVERSALS CLASSWORK

NAME _____

Solve for x and classify the pairs.

1.



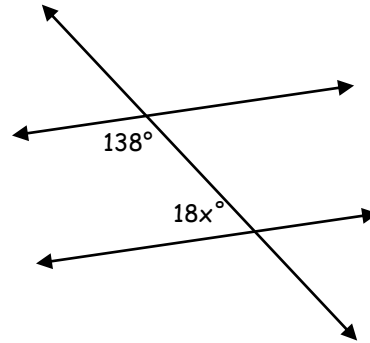
$x =$ _____

Angle Pair: _____

NAME _____

Solve for x and classify the pairs.

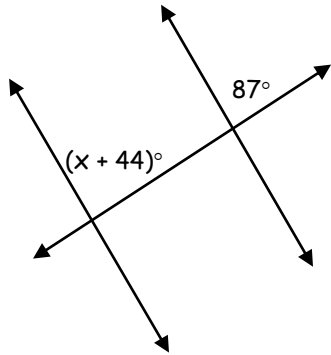
2.



$x =$ _____

Angle Pair: _____

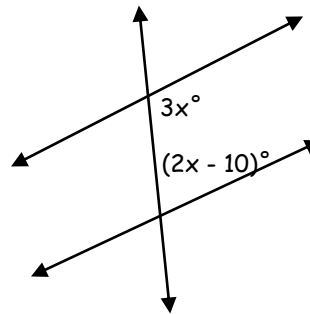
3.



$x =$ _____

Angle Pair: _____

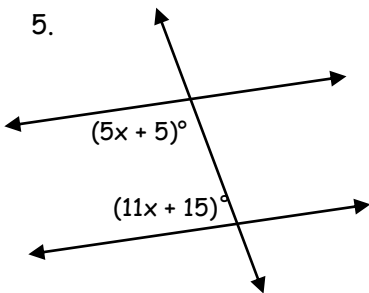
4.



$x =$ _____

Angle Pair: _____

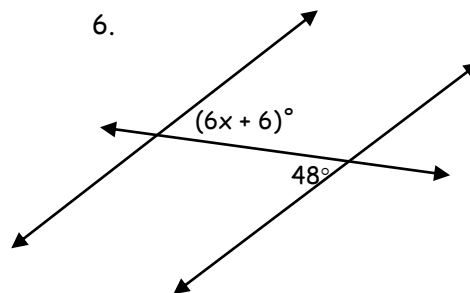
5.



$x =$ _____

Angle Pair: _____

6.



$x =$ _____

Angle Pair: _____