


PARALLEL LINES AND TRANSVERSALS

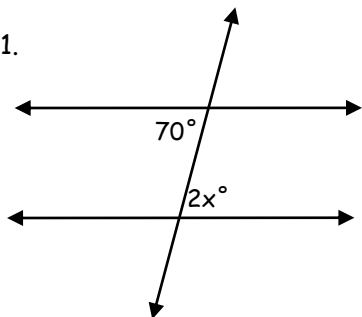


NAME _____

PERIOD _____

Solve for x and classify the pairs. SHOW ALL WORK!!!!

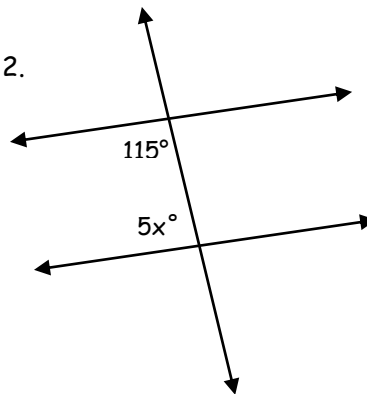
1.



$x =$ _____

Angle Pair: _____

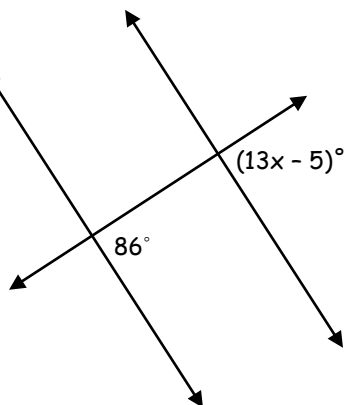
2.



$x =$ _____

Angle Pair: _____

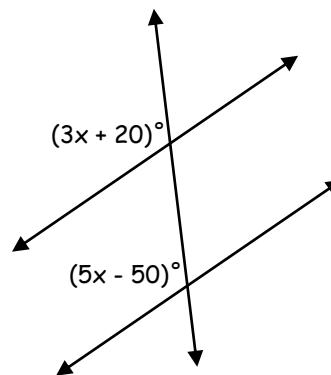
3.



$x =$ _____

Angle Pair: _____

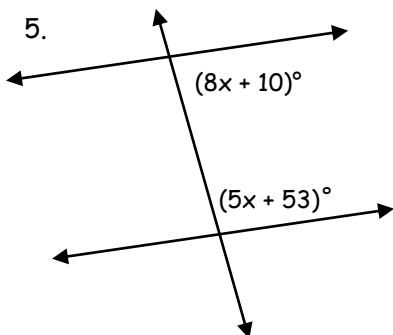
4.



$x =$ _____

Angle Pair: _____

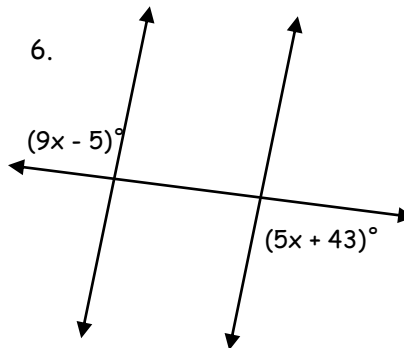
5.



$x =$ _____

Angle Pair: _____

6.



$x =$ _____

Angle Pair: _____