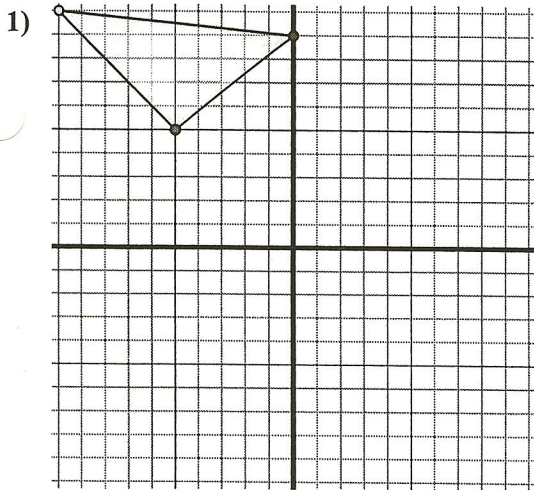




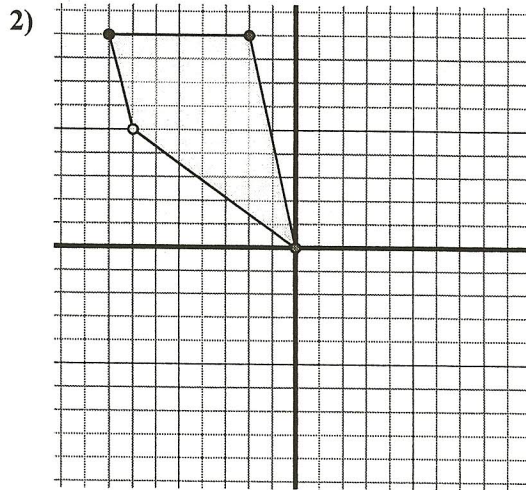
Translate each shape as described.



The shape above has the following coordinates:

- A. (-5 , 5)
- B. (0 , 9)
- C. (-10 , 10)

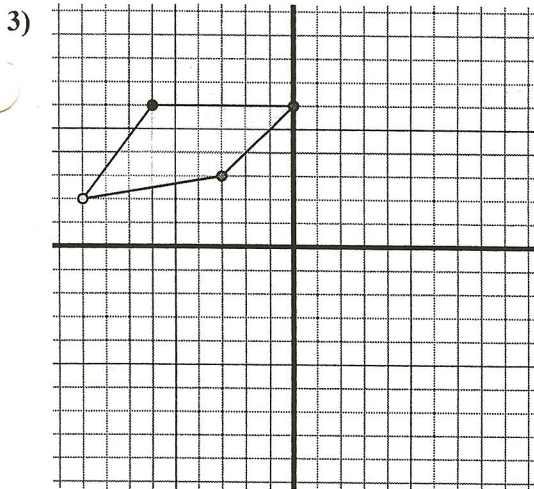
Move the shape 4 units right and 1 unit down.



The shape above has the following coordinates:

- A. (0 , 0)
- B. (-2 , 9)
- C. (-8 , 9)
- D. (-7 , 5)

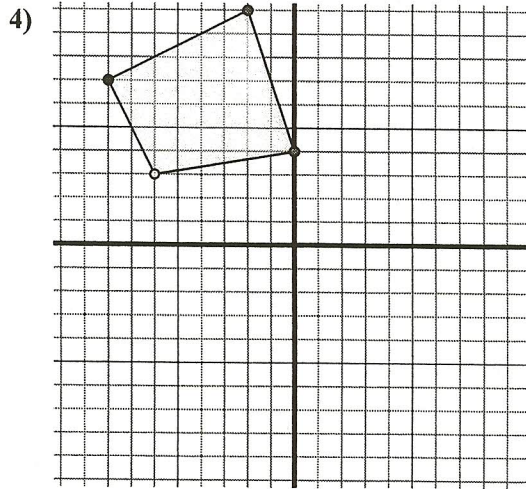
Move the shape 4 units right and 1 unit down.



The shape above has the following coordinates:

- A. (-3 , 3)
- B. (0 , 6)
- C. (-6 , 6)
- D. (-9 , 2)

Move the shape 9 units right and 2 units up.



The shape above has the following coordinates:

- A. (0 , 4)
- B. (-2 , 10)
- C. (-8 , 7)
- D. (-6 , 3)

Move the shape 9 units right and 7 units down.

Answers

1A. _____

1B. _____

1C. _____

1G. Graph

2A. _____

2B. _____

2C. _____

2D. _____

2G. Graph

3A. _____

3B. _____

3C. _____

3D. _____

3G. Graph

4A. _____

4B. _____

4C. _____

4D. _____

4G. Graph