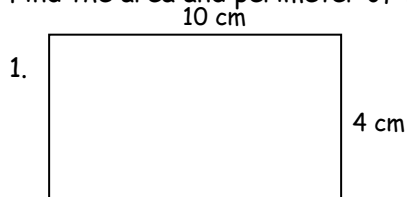


AREA AND PERIMETER

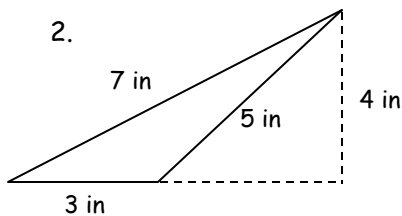


NAME _____ DATE _____ BLOCK _____

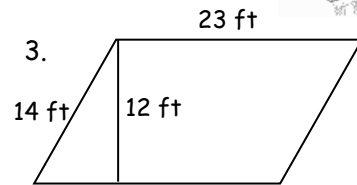
Find the area and perimeter of the following shapes.



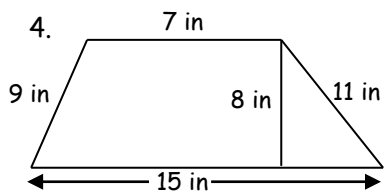
AREA = _____ PER = _____



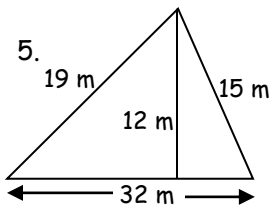
AREA = _____ PER = _____



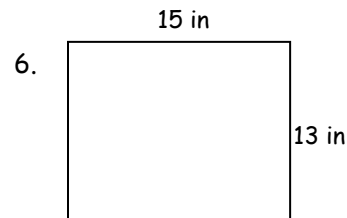
AREA = _____ PER = _____



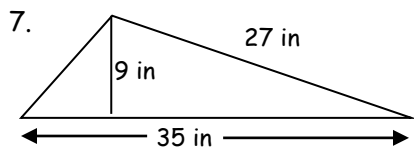
AREA = _____ PER = _____



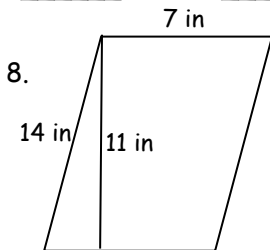
AREA = _____ PER = _____



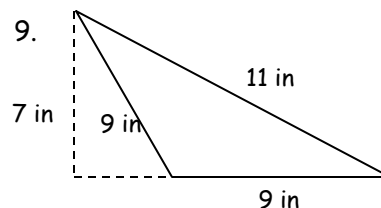
AREA = _____ PER = _____



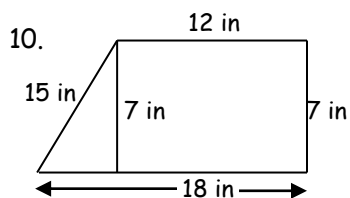
AREA = _____ PER = _____



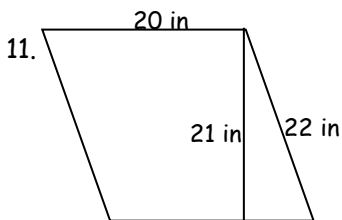
AREA = _____ PER = _____



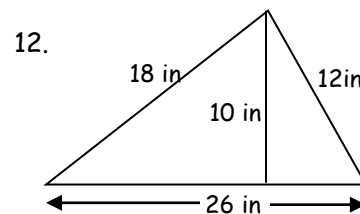
AREA = _____ PER = _____



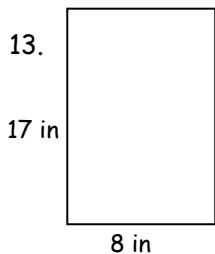
AREA = _____ PER = _____



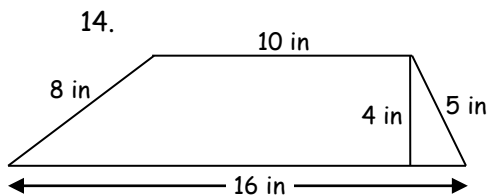
AREA = _____ PER = _____



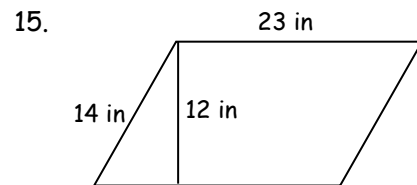
AREA = _____ PER = _____



AREA = _____ PER = _____



AREA = _____ PER = _____



AREA = _____ PER = _____