

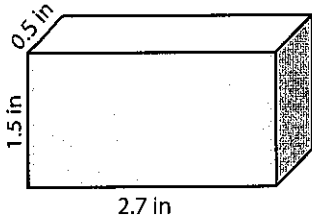
Name : _____

Score : _____

Volume - Rectangular Prism

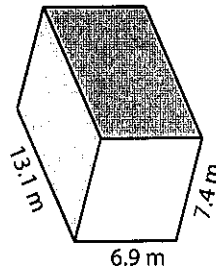
Find the volume of each rectangular prism. Round the answer to nearest tenth.

1)



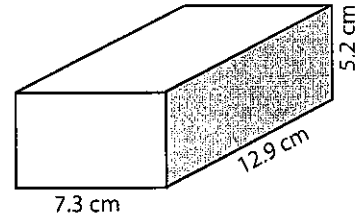
Volume = _____

2)



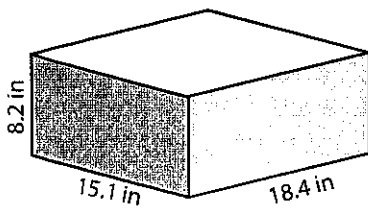
Volume = _____

3)



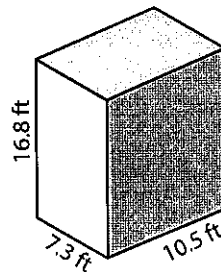
Volume = _____

4)



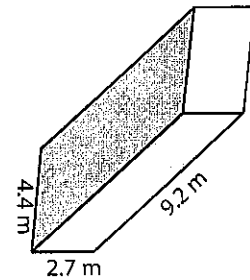
Volume = _____

5)



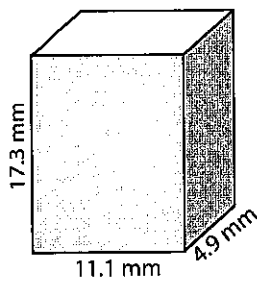
Volume = _____

6)



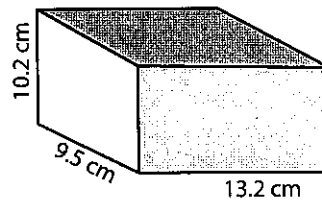
Volume = _____

7)



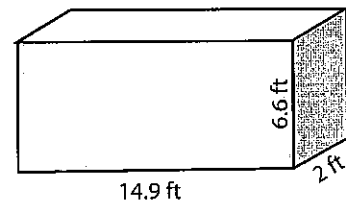
Volume = _____

8)



Volume = _____

9)



Volume = _____

10) Lisa wants to have air conditioning at her office. The dimension of the office is 9.8 feet x 4.4 feet x 17.9 feet. Find the volume of air needs to be cooled.

Volume = _____