

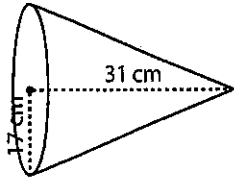
Name: _____

Score: _____

Volume - Cone

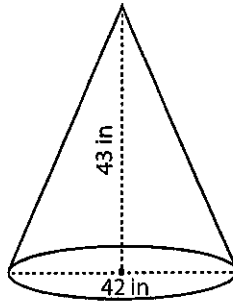
Find the volume of each cone. Round the answer to nearest tenth. (use $\pi = 3.14$)

1)



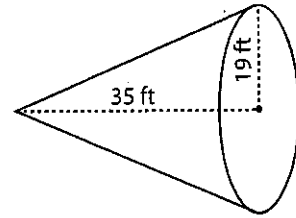
Volume = _____

2)



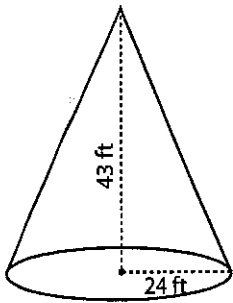
Volume = _____

3)



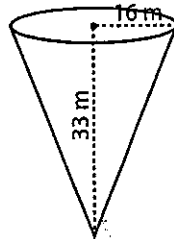
Volume = _____

4)



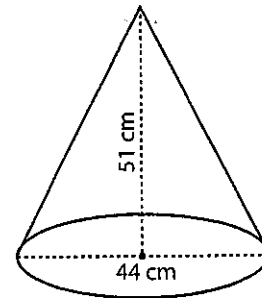
Volume = _____

5)



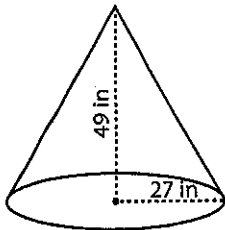
Volume = _____

6)



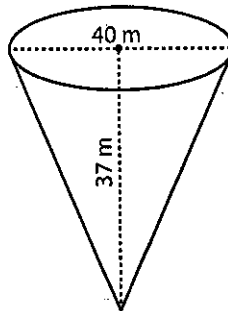
Volume = _____

7)



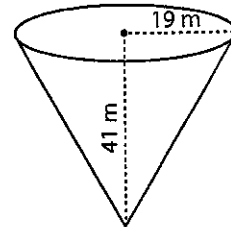
Volume = _____

8)



Volume = _____

9)



Volume = _____

10) A conical flask has a diameter of 20 centimeter and a height of 18 centimeter. Find the volume of air it can occupy.

Volume = _____