
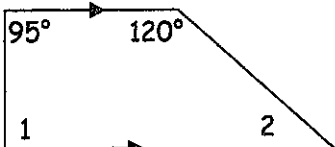


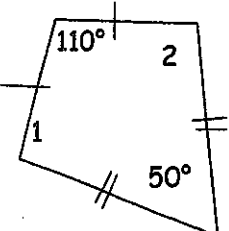
TRAPEZOIDS AND KITES

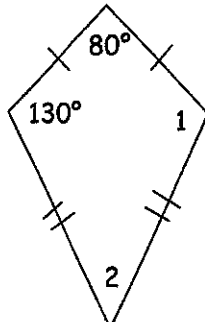
NAME _____ PERIOD _____

Find the angle measures.

1.  $m\angle 1 =$ _____
 $m\angle 2 =$ _____
 $m\angle 3 =$ _____

2.  $m\angle 1 =$ _____
 $m\angle 2 =$ _____

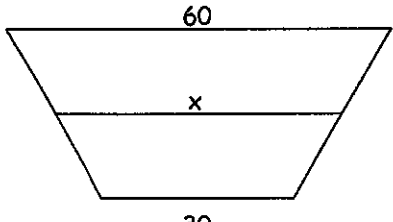
3.  $m\angle 1 =$ _____
 $m\angle 2 =$ _____

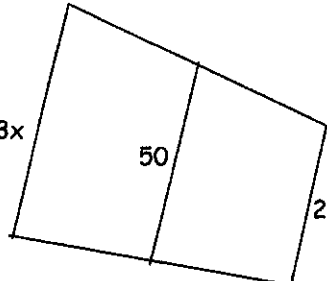
4.  $m\angle 1 =$ _____
 $m\angle 2 =$ _____

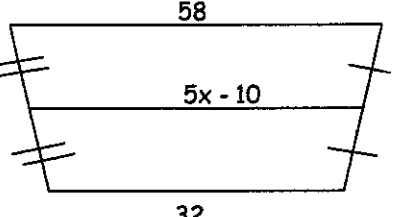
TRAPEZOID MIDSEGMENTS

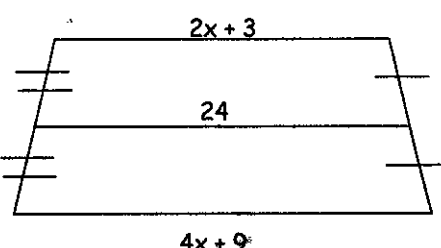
NAME _____ PERIOD _____

SOLVE FOR X.

1.  $x =$ _____

2.  $x =$ _____

3.  $x =$ _____

4.  $x =$ _____